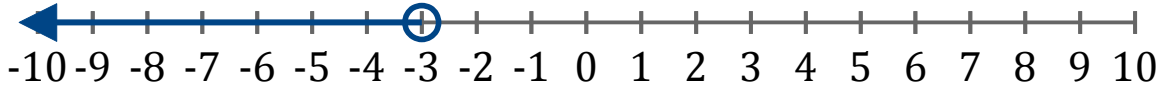


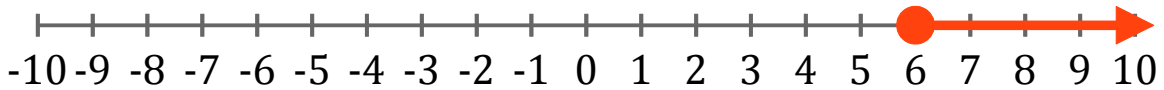
# Inequality Graphs (D)

Write the inequality for each graph.

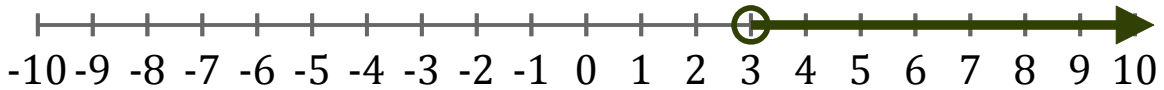
1. \_\_\_\_\_



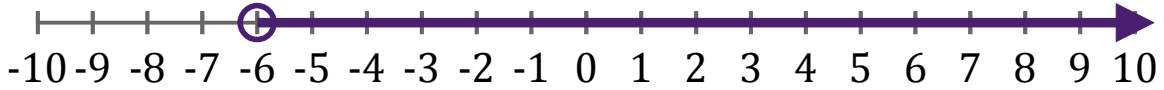
2. \_\_\_\_\_



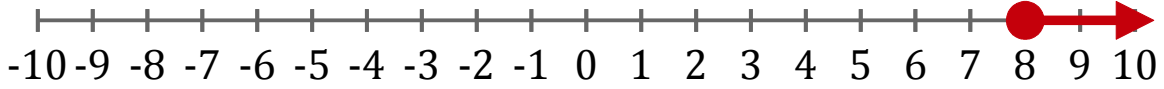
3. \_\_\_\_\_



4. \_\_\_\_\_



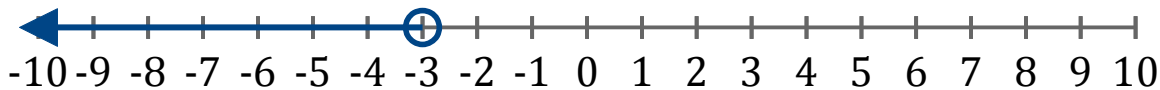
5. \_\_\_\_\_



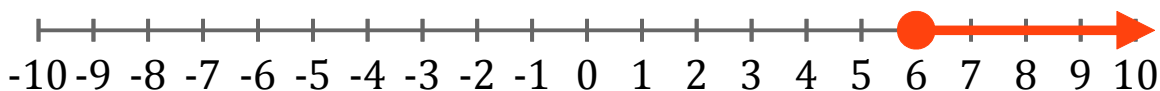
# Inequality Graphs (D) Answers

Write the inequality for each graph.

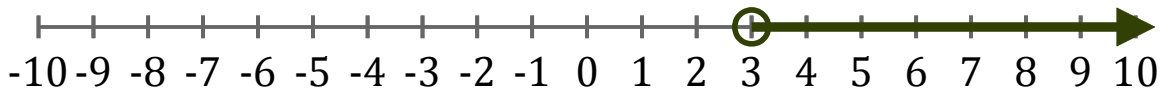
1.  $x < -3$



2.  $x \geq 6$



3.  $x > 3$



4.  $x > -6$



5.  $x \geq 8$

